




# Location on a grid
















Look at the grid and then answer the question.

Which box is the bird in?

B, 2

2		
1		
	A	B

Look at the grid and then answer the questions below.

8								
7								
6								
5								
4								
3								
2								
1								
	A	B	C	D	E	F	G	H

Write where each of the animals can be found.

- |       |                      |           |                      |       |                      |
|-------|----------------------|-----------|----------------------|-------|----------------------|
| mouse | <input type="text"/> | elephant  | <input type="text"/> | horse | <input type="text"/> |
| lion  | <input type="text"/> | zebra     | <input type="text"/> | tiger | <input type="text"/> |
| cat   | <input type="text"/> | chicken   | <input type="text"/> | pig   | <input type="text"/> |
| cow   | <input type="text"/> | goat      | <input type="text"/> | whale | <input type="text"/> |
| crab  | <input type="text"/> | butterfly | <input type="text"/> | sheep | <input type="text"/> |

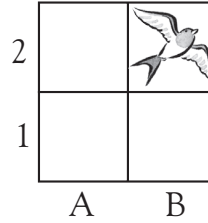


# Location on a grid

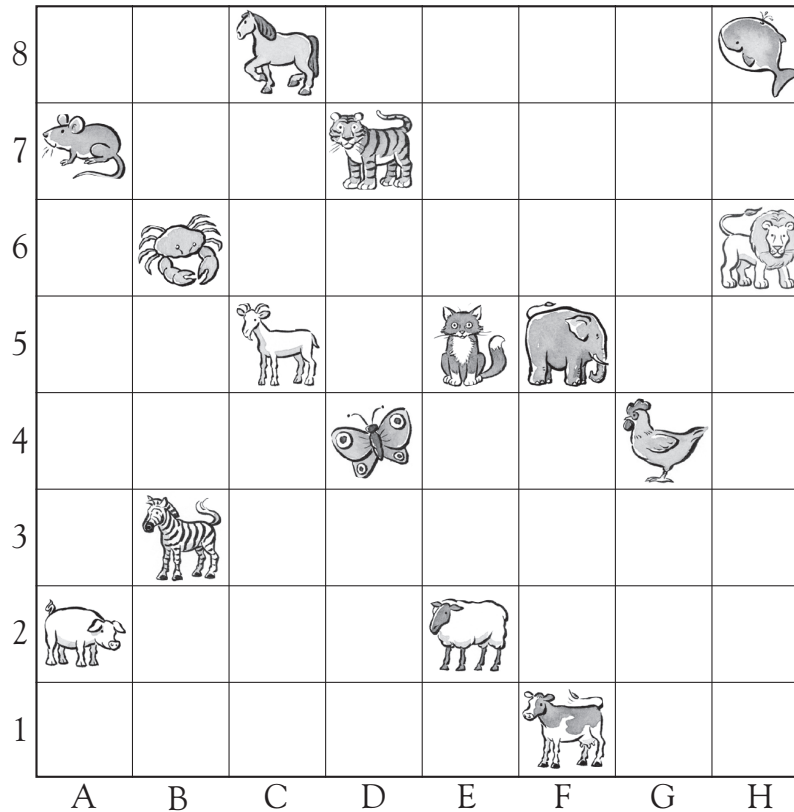
Look at the grid and then answer the question.

Which box is the bird in?

B, 2



Look at the grid and then answer the questions below.



Write where each of the animals can be found.

mouse

A, 7

elephant

F, 5

horse

C, 8

lion

H, 6

zebra

B, 3

tiger

D, 7

cat

E, 5

chicken

G, 4

pig

A, 2

cow

F, 1

goat

C, 5

whale

H, 8

crab

B, 6

butterfly

D, 4

sheep

E, 2

To label the squares on the grid, children should understand that the letter should precede the number. This will prepare them to learn about coordinates on graphs where the value from the x-axis is written before the value from the y-axis.