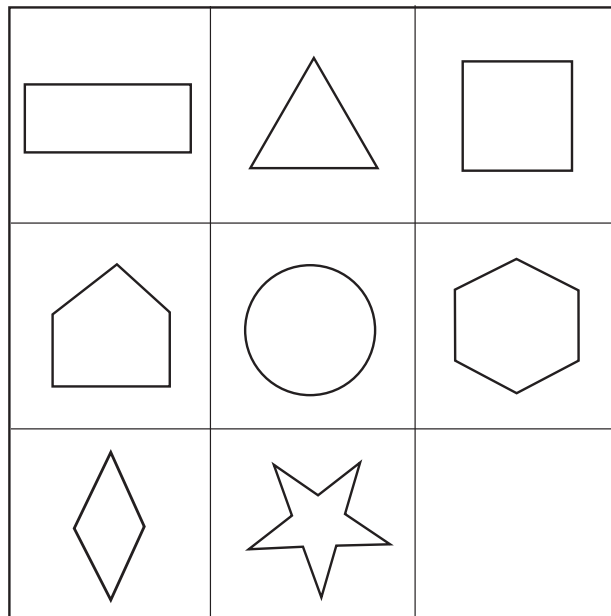




# Shapes and places

Look at the shapes and answer the questions.



circle  
hexagon  
diamond  
pentagon  
rectangle  
square  
star  
triangle

Which shape is ...

**underneath** the circle?.....

to the **left** of the triangle?.....

**above** the hexagon?.....

**below** the pentagon?.....

**between** the rectangle and the diamond?.....

**diagonally above** the empty space?.....

**beside** the diamond?.....

**on top** of the diamond?.....

**between** the triangle and the star?.....

on the **right-hand end** of the top row?.....


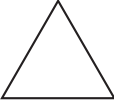



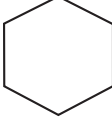


in the **center** of the grid?.....

in the **top left-hand corner**?.....



# Shapes and places

Look at the shapes and answer the questions.

circle

hexagon

diamond

pentagon

rectangle

square

star

triangle

Which shape is ...

**underneath** the circle? ..... star .....

to the **left** of the triangle? ..... rectangle .....

**above** the hexagon? ..... square .....

**below** the pentagon? ..... diamond .....

**between** the rectangle and the diamond? ..... pentagon .....

**diagonally above** the empty space? ..... circle .....

**beside** the diamond? ..... star .....

**on top** of the diamond? ..... pentagon .....

**between** the triangle and the star? ..... circle .....

on the **right-hand end** of the top row? ..... square .....

in the **center** of the grid? ..... circle .....

in the **top left-hand corner**? ..... rectangle .....

This page gives children practice with words that specify position or location. Help them with the questions, if necessary.