



Fact families

Finish the fact family for this group of numbers.



$$5 + 4 = 9$$

$$4 + 5 = 9$$

$$9 - 4 = 5$$

$$9 - 5 = 4$$

Finish the fact family for each group of numbers.

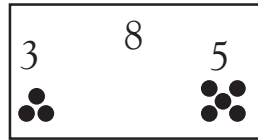


$$4 + 3 = \square$$

$$3 + 4 = \square$$

$$7 - 3 = \square$$

$$7 - 4 = \square$$

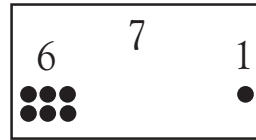


$$3 + 5 = \square$$

$$5 + 3 = \square$$

$$8 - 5 = \square$$

$$8 - 3 = \square$$

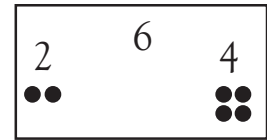


$$6 + 1 = \square$$

$$1 + 6 = \square$$

$$7 - 1 = \square$$

$$7 - 6 = \square$$

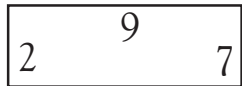


$$2 + 4 = \square$$

$$4 + 2 = \square$$

$$6 - 4 = \square$$

$$6 - 2 = \square$$

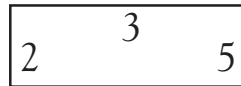


$$2 + 7 = \square$$

$$7 + 2 = \square$$

$$9 - 2 = \square$$

$$9 - 7 = \square$$

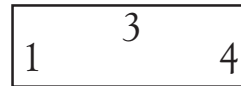


$$3 + 2 = \square$$

$$2 + 3 = \square$$

$$5 - 2 = \square$$

$$5 - 3 = \square$$

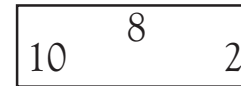


$$3 + 1 = \square$$

$$1 + 3 = \square$$

$$4 - 1 = \square$$

$$4 - 3 = \square$$



$$2 + 8 = \square$$

$$8 + 2 = \square$$

$$10 - 2 = \square$$

$$10 - 8 = \square$$



$$5 + 5 = \square$$

$$10 - 5 = \square$$



$$4 + 4 = \square$$

$$8 - 4 = \square$$



$$3 + 3 = \square$$

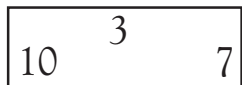
$$6 - 3 = \square$$

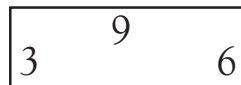


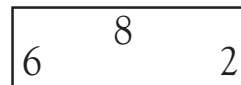
$$2 + 2 = \square$$

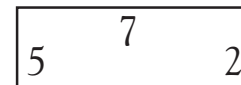
$$4 - 2 = \square$$

Finish the fact family for each group of numbers.











Fact families

Finish the fact family for this group of numbers.



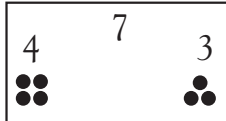
$$5 + 4 = 9$$

$$4 + 5 = 9$$

$$9 - 4 = 5$$

$$9 - 5 = 4$$

Finish the fact family for each group of numbers.

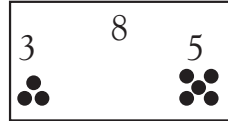


$$4 + 3 = 7$$

$$3 + 4 = 7$$

$$7 - 3 = 4$$

$$7 - 4 = 3$$

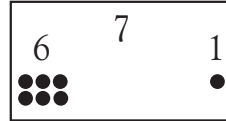


$$3 + 5 = 8$$

$$5 + 3 = 8$$

$$8 - 5 = 3$$

$$8 - 3 = 5$$

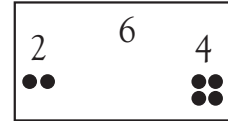


$$6 + 1 = 7$$

$$1 + 6 = 7$$

$$7 - 1 = 6$$

$$7 - 6 = 1$$




$$2 + 4 = 6$$

$$4 + 2 = 6$$

$$6 - 4 = 2$$

$$6 - 2 = 4$$

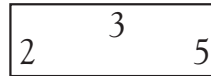


$$2 + 7 = 9$$

$$7 + 2 = 9$$

$$9 - 2 = 7$$

$$9 - 7 = 2$$

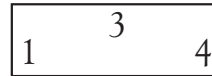


$$3 + 2 = 5$$

$$2 + 3 = 5$$

$$5 - 2 = 3$$

$$5 - 3 = 2$$




$$3 + 1 = 4$$

$$1 + 3 = 4$$

$$4 - 1 = 3$$

$$4 - 3 = 1$$




$$2 + 8 = 10$$

$$8 + 2 = 10$$


$$10 - 2 = 8$$

$$10 - 8 = 2$$




$$5 + 5 = 10$$

$$10 - 5 = 5$$




$$4 + 4 = 8$$

$$8 - 4 = 4$$



$$3 + 3 = 6$$

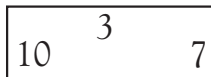
$$6 - 3 = 3$$



$$2 + 2 = 4$$

$$4 - 2 = 2$$

Finish the fact family for each group of numbers.

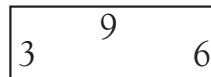


$$7 + 3 = 10$$

$$3 + 7 = 10$$

$$10 - 3 = 7$$

$$10 - 7 = 3$$

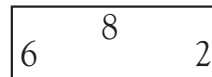


$$3 + 6 = 9$$

$$6 + 3 = 9$$

$$9 - 3 = 6$$

$$9 - 6 = 3$$

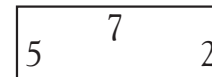


$$6 + 2 = 8$$

$$2 + 6 = 8$$

$$8 - 2 = 6$$

$$8 - 6 = 2$$



$$5 + 2 = 7$$

$$2 + 5 = 7$$

$$7 - 2 = 5$$

$$7 - 5 = 2$$

Children should understand that subtraction “undoes” addition. You may want to use counters to demonstrate addition fact families.