

Addition



How many are there in all? Color them in.

$$\bigcirc\bigcirc\bigcirc + \bigcirc\bigcirc\bigcirc\bigcirc = \bullet\bullet\bullet\bullet\bullet\bullet\bigcirc$$

$$\begin{array}{c} \bigcirc\bigcirc\bigcirc \\ \bigcirc\bigcirc \end{array} + \begin{array}{c} \bigcirc\bigcirc \\ \bigcirc \end{array} = \bigcirc\bigcirc\bigcirc\bigcirc\bigcirc\bigcirc\bigcirc\bigcirc\bigcirc\bigcirc$$

$$\begin{array}{c} \text{ball} \\ \text{ball} \end{array} + \begin{array}{c} \text{ball} \\ \text{ball} \\ \text{ball} \end{array} = \begin{array}{c} \text{ball} \text{ ball} \text{ ball} \text{ ball} \\ \text{ball} \text{ ball} \text{ ball} \text{ ball} \end{array}$$

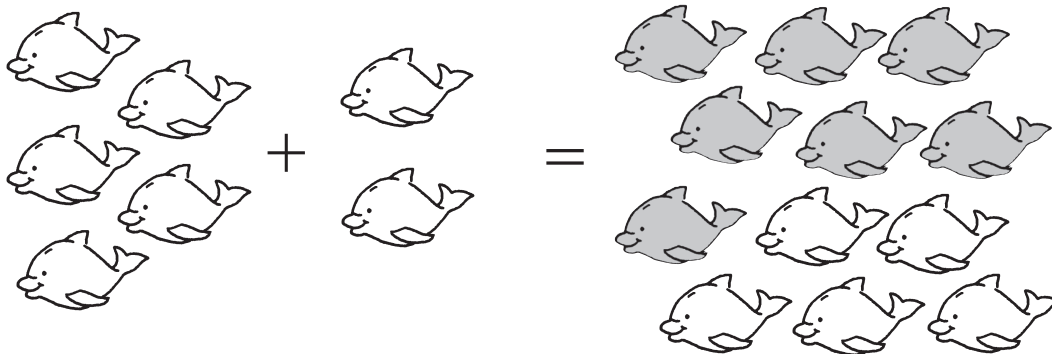
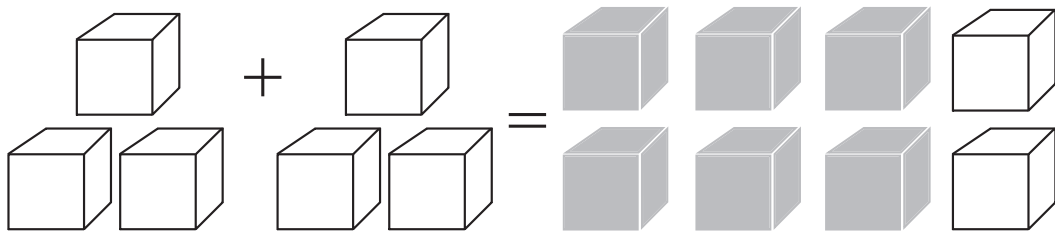
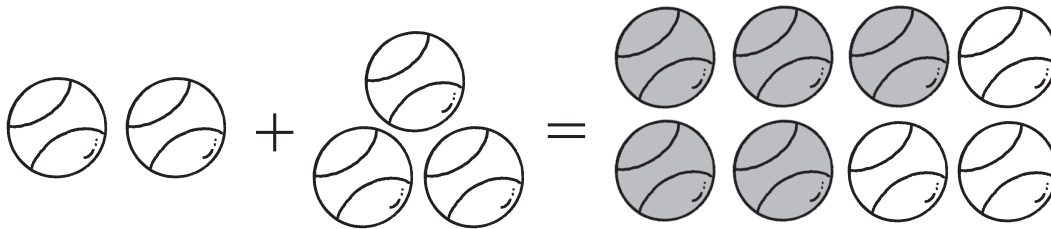
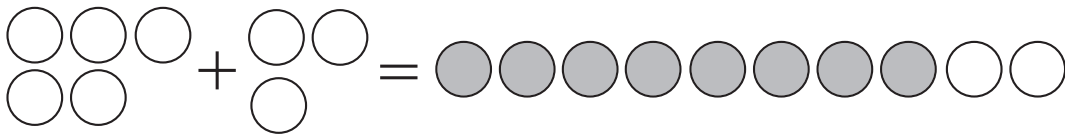
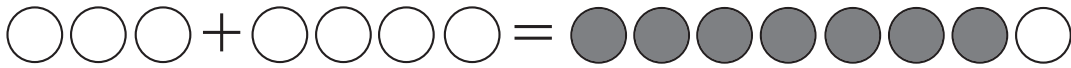
$$\begin{array}{c} \text{cube} \\ \text{cube} \text{ cube} \end{array} + \begin{array}{c} \text{cube} \\ \text{cube} \text{ cube} \end{array} = \begin{array}{c} \text{cube} \text{ cube} \text{ cube} \text{ cube} \\ \text{cube} \text{ cube} \text{ cube} \text{ cube} \end{array}$$

$$\begin{array}{c} \text{fish} \\ \text{fish} \\ \text{fish} \end{array} + \begin{array}{c} \text{fish} \\ \text{fish} \end{array} = \begin{array}{c} \text{fish} \text{ fish} \text{ fish} \\ \text{fish} \text{ fish} \text{ fish} \\ \text{fish} \text{ fish} \text{ fish} \\ \text{fish} \text{ fish} \text{ fish} \end{array}$$

Addition



How many are there in all? Color them in.



Suggest to children that they write the number of items below each group on either side of the addition symbol. When they find the total, they can write that number under the items they have colored in.