

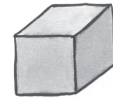
Sorting 3-dimensional shapes



Does the shape have a curved surface?



yes




no

Does each shape have a curved surface? Write yes or no.


1




2



3




4



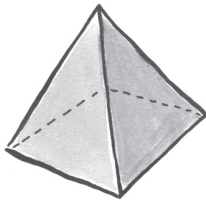
5




6



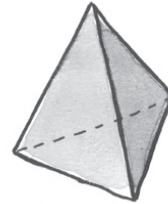
7



8



9



Write the numbers of the shapes in the correct box.

Shapes with curved surfaces

Shapes with no curved surfaces

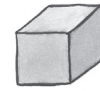
Sorting 3-dimensional shapes



Does the shape have a curved surface?



yes



no


Does each shape have a curved surface? Write yes or no.

1




yes

2




yes

3



no

4




yes

5



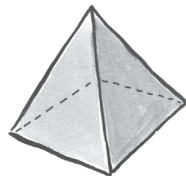
yes

6




no

7



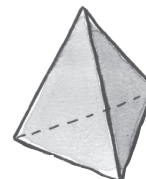
no

8



no

9



no

Write the numbers of the shapes in the correct box.

Shapes with curved surfaces

1, 2, 4, and 5

Shapes with no curved surfaces

3, 6, 7, 8, and 9

Children should find this simple sorting straightforward. If problems are encountered, you may want to find some household objects that are the same shapes.